

Maths

Spring 2


Day 1

Feb 21-16:28

Counting

Count forwards and backwards in tens to 120.

Feb 21-16:29



100

70

10

20

80

90

30

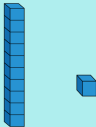
40

50


60

Feb 21-16:29

Let's make some numbers, counting in tens and ones.



Feb 21-16:29



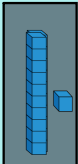
1 2 3

4 5 6

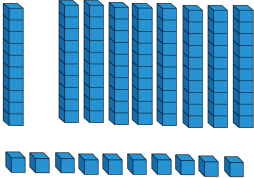
7 8 9

0

2



Feb 21-16:29



Feb 21-16:30

Maths

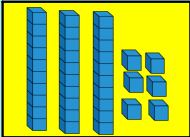
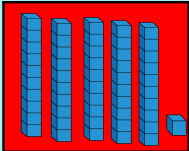

Spring 2

Day 2

Feb 21-16:28

I.E.



Can you work out each number?



Feb 21-16:29



Feb 21-17:35



SALE

20p less

£

20p more

Feb 21-17:35

24.02.2020

I1: To add and subtract a multiple of ten from a 2-digit number.


I can count on and back in tens

I can partition numbers into tens and ones

I can add and subtract a multiple of ten


Make the amounts using 10p and 1p coins.

Add or subtract tens to find the new prices.




SALE

10p less =



£


20p more =



SALE

30p less =

Feb 21-19:19



Feb 21-19:13

Maths

Spring 2

Day 3

Feb 21-16:28

I.E.

Can you continue the pattern?

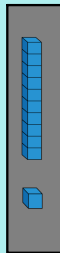
— — 2| 3| — — — — — — —

— — — — — 97

Feb 21-19:19

What does each digit represent?

24




Feb 21-19:19

What does each digit represent?

25

52




Feb 21-19:19

What numbers can you make with these digits?

What does the digit represent?

2 1 3



Feb 21-19:19

25.02.2020

LI: To read and write and order numbers to 100.

I can read and write 2 digit numbers	
I can partition numbers into tens and ones	
I can order numbers to 100	

Use these digits to make 2 digit numbers.

Draw each number using tens and ones.

2 1 4 3

For example:



1. What is the largest number you can make?
2. What is the smallest number you can make?
3. Add the 2 smallest numbers together.
4. Subtract the smallest number from the largest.
5. Put the numbers in order from smallest to largest.

Feb 21-19:19

Maths Spring 2

Day 4

Feb 21-16:28

I.E.

Can you write these numbers in order from smallest to largest?


7 51 19 35 22

Feb 21-20:14

What is my number?

Prove it!

It has 5 tens.
It has 8 ones.




Feb 21-20:25

What is my number?

Prove it!

It is 10 more than 35.



Feb 21-20:25

Feb 21-20:25

Feb 21-20:25